


Maths

TT Rockstars




Round **84,516**

A




£135,300

B




£119,125

C




£130,500

D



£131,500

E



£91,500

Put these houses in order of price starting with the **lowest price**.

One has been done for you.

_____ **B** _____
lowest

Which of these numbers give **80** when **rounded to the nearest 10**?

Circle all the correct numbers.

 84 87 72 76 90

to the nearest 10

to the nearest 100

to the nearest 1,000

Reading

Book: _____

Pages: _____

Write a brief summary of what you have read this week:

Spellings

Practice this weeks spelling rule on spellingframe.co.uk—year 3/4 rule 2.

	Monday	Tuesday	Wednesday	Thursday
myth				
symbol				
Egypt				
pyramid				
mystery				
dynasty				

Please bring this sheet back, completed and signed on Friday.

Signed _____