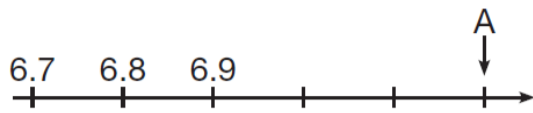


## TT Rock star



What number is marked at A?

Circle two numbers that add together to equal 0.25

0.05      0.23      0.2      0.5

Look at this equation.

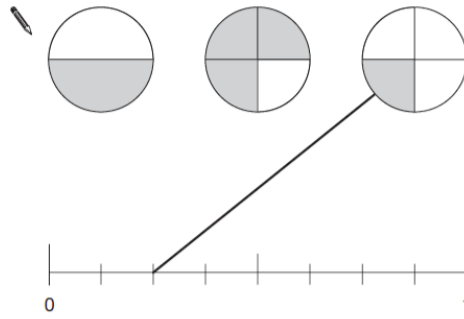
$$3a + 20 = 4a + k$$

If  $a = 15$ , find the value of  $k$

A fraction of each shape is shaded.

Match each fraction to the correct place on the number line.

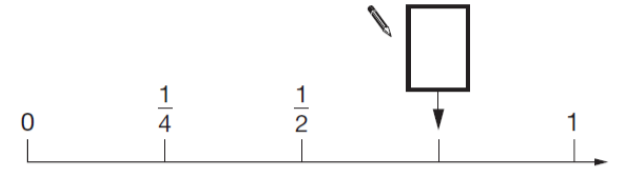
One has been done for you.



## Maths

Here is part of a number line.

Write in the missing fraction.



Here are five number cards.



A and B stand for two **different** whole numbers.

The sum of all the numbers on all five cards is 30

What could be the values of A and B?

A =       B =

## Reading

Book: \_\_\_\_\_

Pages: \_\_\_\_\_

Write a brief summary of what you have read this week:

\_\_\_\_\_

	Monday	Tuesday	Wednesday	Thursday
enough				
through				
hesitant				
hesitancy				
tolerant				
tolerance				
fearful				
deceitful				

## Words of the week

Desolate Imperative Onslaught

\_\_\_\_\_

Please bring this sheet back, completed and signed on Friday.

Signed \_\_\_\_\_