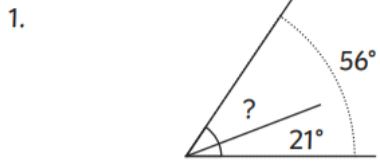
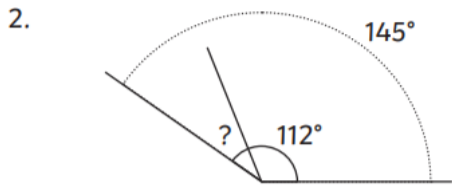


Maths

TT Rockstars



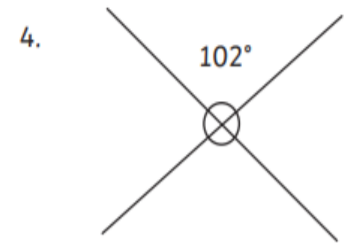
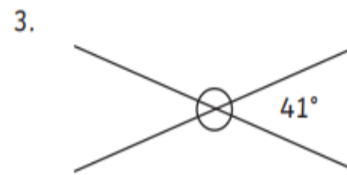
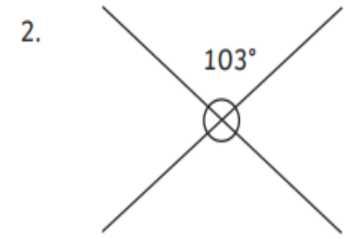
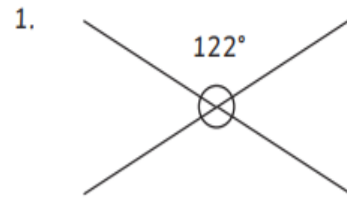
The missing angle is:



The missing angle is:



The missing angle is:



Reading

Book: _____

Pages: _____

Write a brief summary of what you have read this week:

Spellings

	Monday	Tuesday	Wednesday	Thursday
Information				
hesitation				
Decision				
Precision				
Electrician				
magician				

Words of the week

Conventional trepidation plausible

Please bring this sheet back, completed and signed on Friday.

Signed _____