
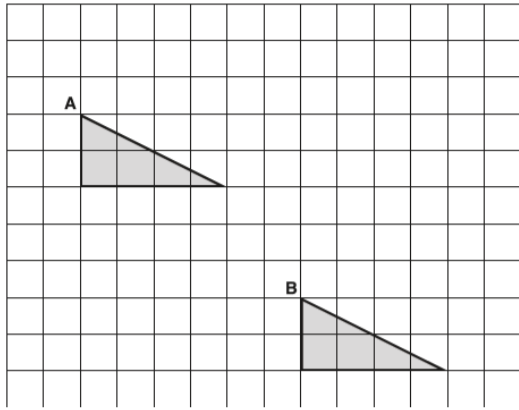


Maths TT Rockstars



A triangle is translated from position A to position B.



Complete the sentence.

The triangle has moved squares to the right

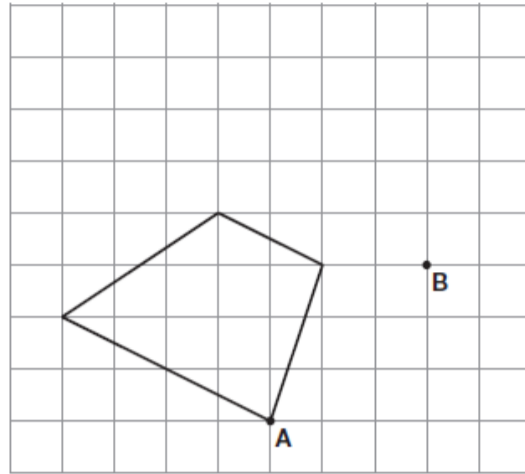
and squares down.

Here is a quadrilateral on a square grid.

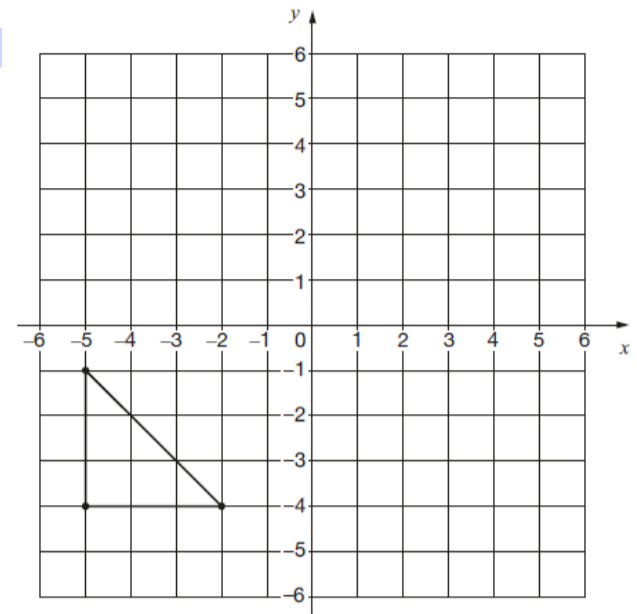
The quadrilateral is translated so that point A moves to point B.

Draw the quadrilateral in its new position.

Use a ruler.



Here is a triangle drawn on a coordinate grid.



The triangle is translated 7 right and 5 up.

Draw the triangle in its new position.

Reading

Book: _____

Pages: _____

Write a brief summary of what you have read this week:

Spellings

	Monday	Tuesday	Wednesday	Thursday
Vicious				
precious				
malicious				
suspicious				
cautious				
ambitious				

Words of the week

Audacious desolate pungent

Please bring this sheet back, completed and signed on Friday.

Signed _____