

$$\boxed{4} + \boxed{} = 10$$

$$\boxed{7} + \boxed{} = 10$$

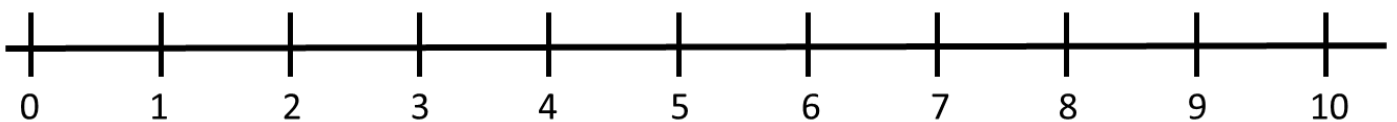
Double 3 is

Double 5 is

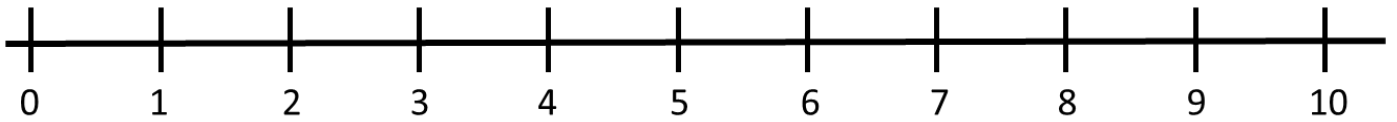
Half of 8 is

Half of 4 is

One **more** than 7 is _____

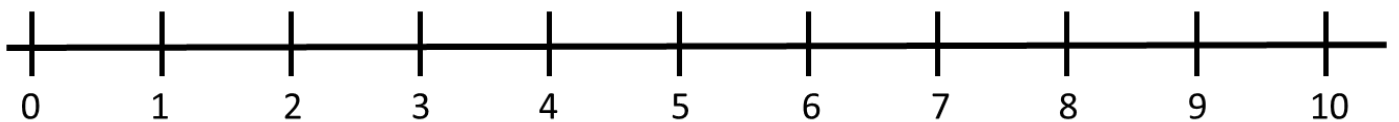


One **less** than 5 is _____



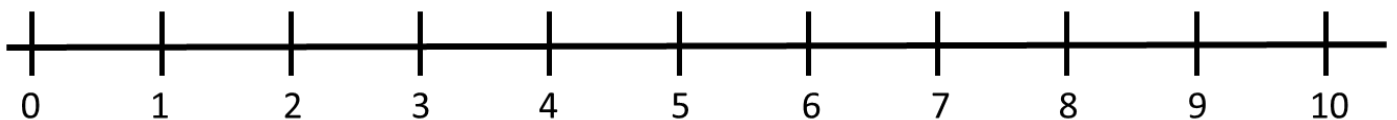
Circle the **greatest** number

8 4 7



Circle the **smallest** number

5 9 2



Order these numbers from greatest to smallest.

7

4

6

greatest

smallest

