

Order these numbers from **smallest** to **greatest**.

6 13 2

Three empty rounded rectangular boxes for ordering the numbers.

smallest

greatest

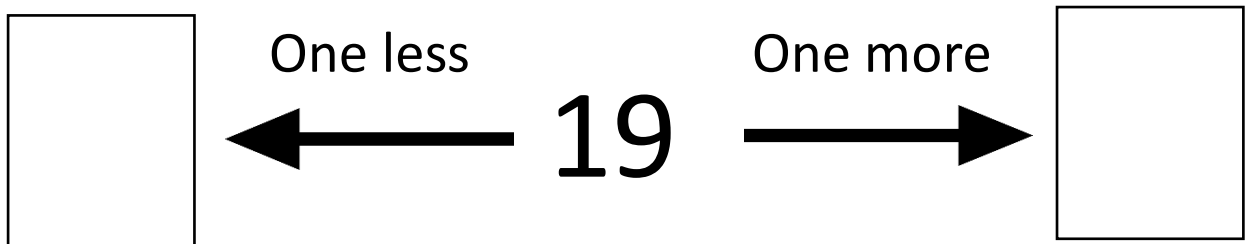
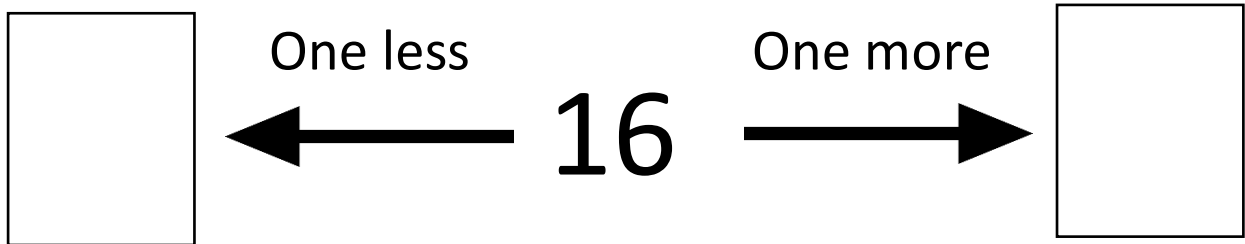
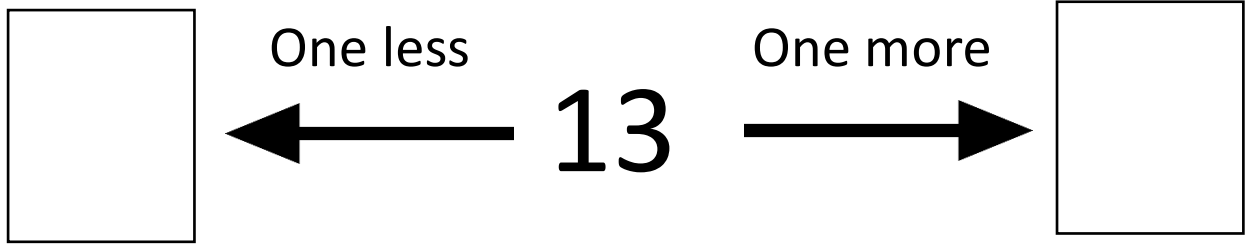
Order these numbers from **smallest** to **greatest**.

14 9 20

Three empty rounded rectangular boxes for ordering the numbers.

smallest

greatest



Double 6 is _____

Double 8 is _____

Half of 18 is _____

Half of 14 is _____

3	4	5		7		
---	---	---	--	---	--	--

4	6		10	12		16
---	---	--	----	----	--	----