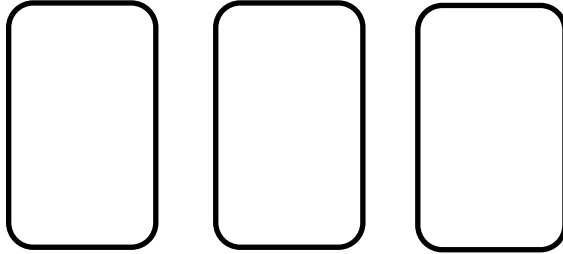


Order these numbers from smallest to greatest.

43

27

32

Three empty rounded rectangular boxes are arranged horizontally, intended for the student to write the numbers in order from smallest to greatest.

Smallest

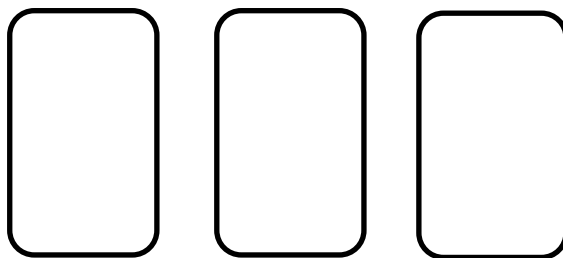
Greatest

Order these numbers from smallest to greatest.

49

29

21

Three empty rounded rectangular boxes are arranged horizontally, intended for the student to write the numbers in order from smallest to greatest.

Smallest

Greatest

What is one **more** than 36?

What is one **less** than 42?

34 is **in-between**

_____ and _____

34 is greater than 23.

21 is less than 42.

36 is greater than 16.

16 is less than 14.



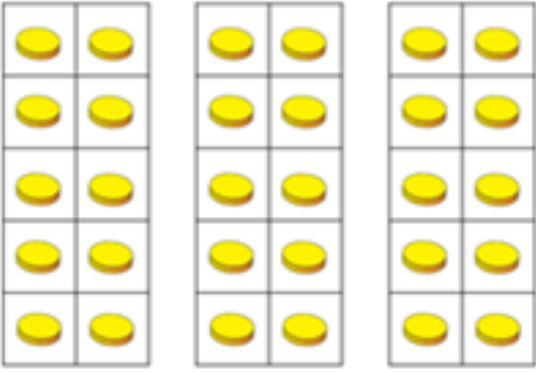
There are _____ groups of ten = beads



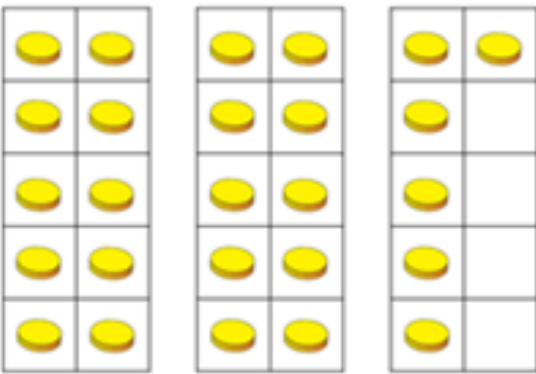
There are _____ groups of ten = beads

20	30	40	
----	----	----	--

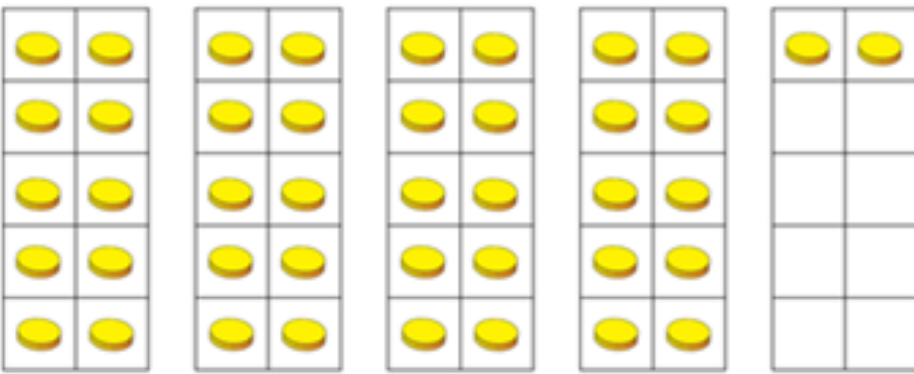
10		30	40
----	--	----	----



Total:



Total:



Total:

