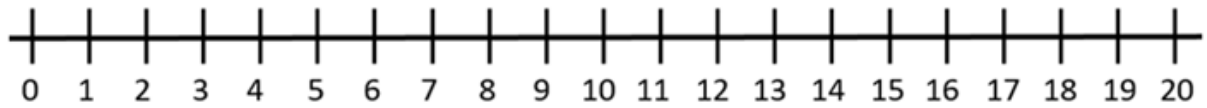
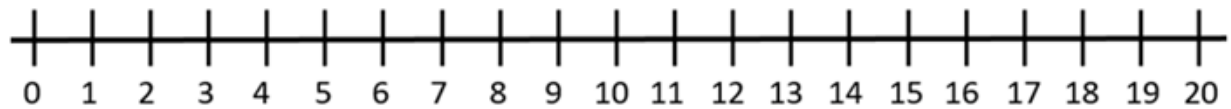


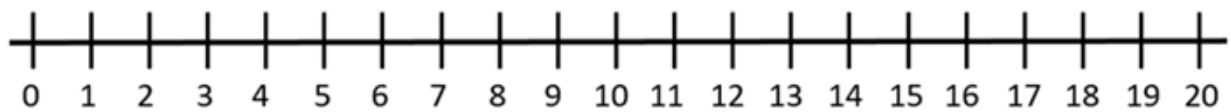
$$8 + 2 = \square$$



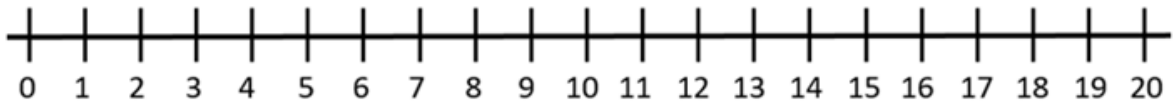
$$11 + 5 = \square$$



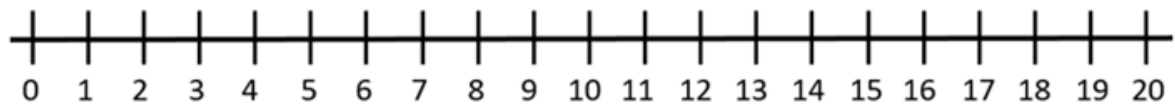
$$14 + 3 = \square$$



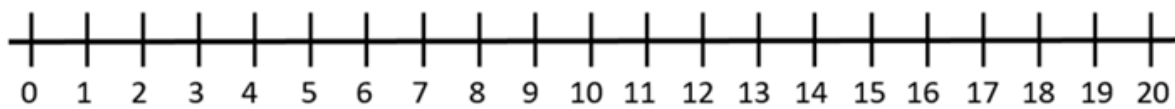
$$7 + 12 = \square$$



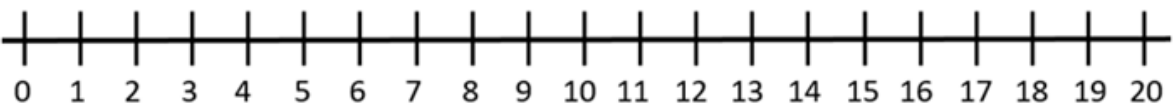
$$14 - 3 = \square$$



$$12 - 5 = \square$$



$$20 - 7 = \square$$



$$18 - 11 = \square$$

$13 + 7 =$

$14 + 6 =$

$2 + 18 =$

$20 - 5 =$

$20 - 8 =$

$20 - 17 =$