



# 3 Times Table Activities

Count in 3s and colour in the grid:

1	2	3	4	5	6
7	8	9	10	11	12
13	14	15	16	17	18
19	20	21	22	23	24
25	26	27	28	29	30
31	32	33	34	35	36

How many pieces of fruit are there?

a)  \_\_\_\_\_ × \_\_\_\_\_ = \_\_\_\_\_

b)  \_\_\_\_\_ × \_\_\_\_\_ = \_\_\_\_\_

Work out these answers:

a)  $4 \times 3 =$  \_\_\_\_\_

g)  $7 \times 3 =$  \_\_\_\_\_

b)  $3 \times 3 =$  \_\_\_\_\_

h)  $1 \times 3 =$  \_\_\_\_\_

c)  $5 \times 3 =$  \_\_\_\_\_

i)  $11 \times 3 =$  \_\_\_\_\_

d)  $2 \times 3 =$  \_\_\_\_\_


j)  $8 \times 3 =$  \_\_\_\_\_

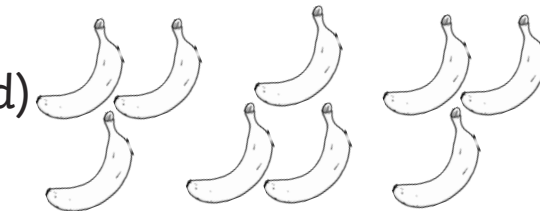
e)  $9 \times 3 =$  \_\_\_\_\_

k)  $10 \times 3 =$  \_\_\_\_\_

f)  $6 \times 3 =$  \_\_\_\_\_

l)  $12 \times 3 =$  \_\_\_\_\_

c)  \_\_\_\_\_ × \_\_\_\_\_ = \_\_\_\_\_

d)  \_\_\_\_\_ × \_\_\_\_\_ = \_\_\_\_\_