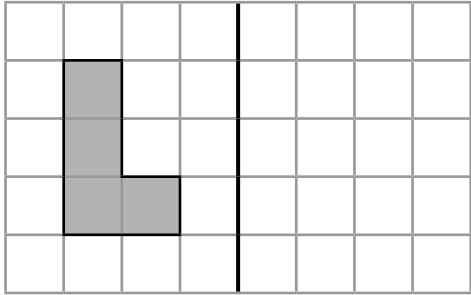


Section 1

Reflect the shape in the line.



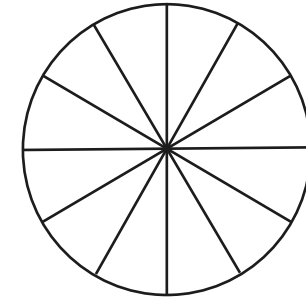
Section 3

Fill in the missing number:

$$6000 + \square + 30 + 8 = 6538$$

Section 5

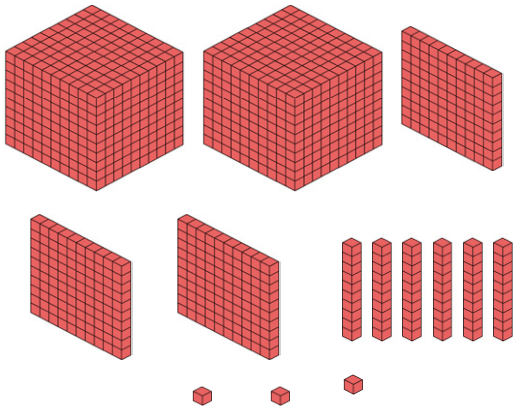
Colour half the circle then write the equivalent fraction to $\frac{1}{2}$.



$$\frac{1}{2} = \frac{\quad}{12}$$

Section 2

How much is here?



Section 4

Order these numbers smallest to largest.

5866 5678 5896 5687 5750

--	--	--	--	--

smallest

largest

Section 6

Tickets to the cinema are £9 per adult and £7.25 for teenagers. How much would it cost for 3 adults and 2 teenagers?

Section 7

Write the missing numbers in the boxes.

1000 less		1000 more
	8014	

Section 8

What is missing from these statements?

$$110 \square 11 = 10$$

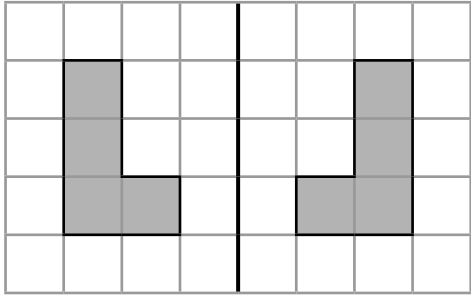
$$2 = \square \div 11$$

Year 4 Maths Activity Mat: 1

Answers

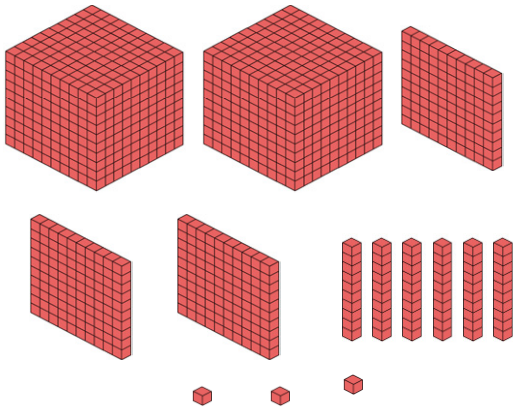
Section 1

Reflect the shape in the line.



Section 2

How much is here?



2363

Section 3

Fill in the missing number:

$$6000 + \boxed{500} + 30 + 8 = 6538$$

Section 4

Order these numbers smallest to largest.

5866 5678 5896 5687 5750

5678	5687	5750	5866	5896
smallest			largest	

Section 6

Tickets to the cinema are £9 per adult and £7.25 for teenagers. How much would it cost for 3 adults and 2 teenagers?

£41.50

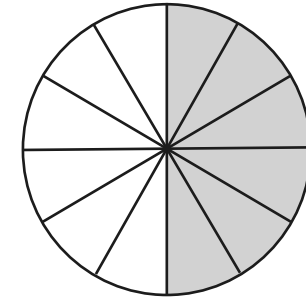
Section 7

Write the missing numbers in the boxes.

1000 less		1000 more
7014	8014	9014

Section 5

Colour half the circle then write the equivalent fraction to $\frac{1}{2}$.



$$\frac{1}{2} = \frac{6}{12}$$

Section 8

What is missing from these statements?

$$110 \div \boxed{} 11 = 10$$

$$2 = \boxed{22} \div 11$$